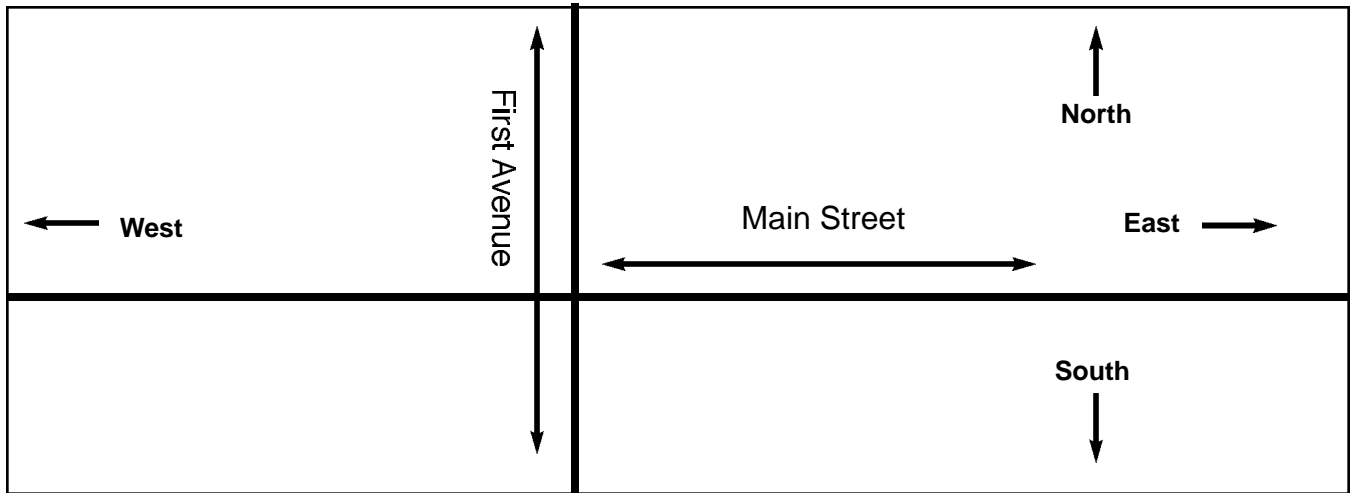



Exercise 10

Reading a Map

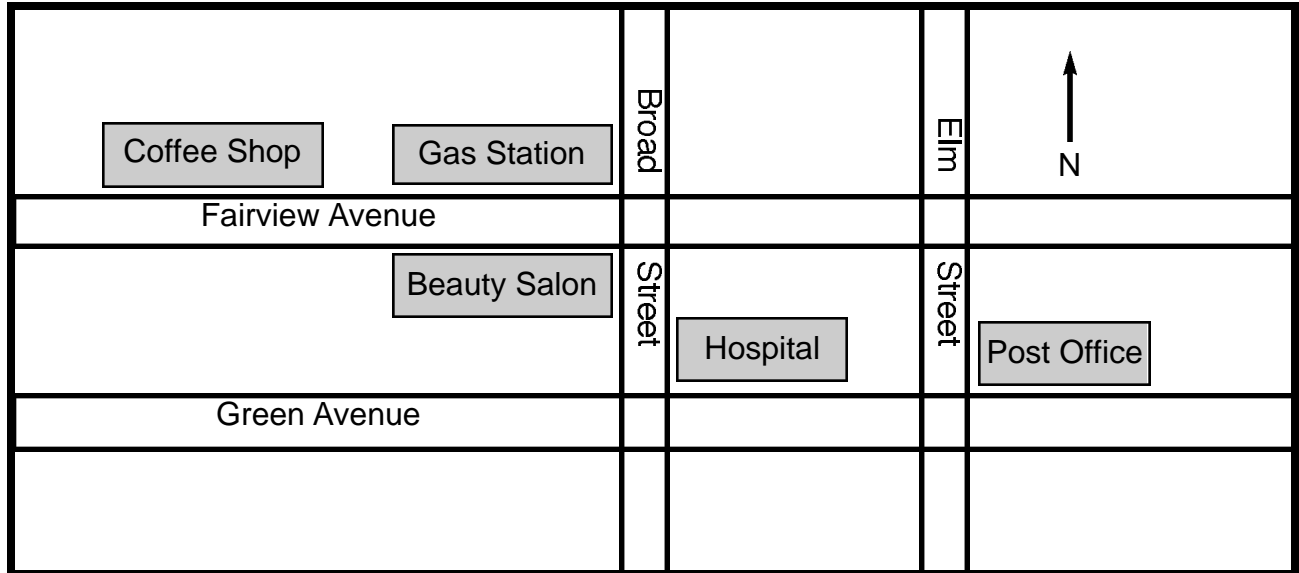


1. Which direction is up? North
2. Which direction is down? _____
3. Which direction is right? _____
4. Which direction is left? _____
5. Which direction does Main Street run? _____
6. Which direction does First Avenue run? _____



1. What direction does Central Avenue run? _____
2. What direction does 2nd Street run? _____
3. Which street is the school on? _____
4. Which street is the bank on? _____
5. To go from the school to the bank which direction do you go on First Street?

6. To go from the school to the bank which direction do you go on Central Avenue?



1. What street is the gas station on? _____
2. What is next to gas station? _____
3. What is across the street from the gas station? _____
4. What street is the post office on? _____
5. What is one block west of the the post office? _____
6. What is one block north of the hospital? _____
7. To go from the coffee shop to the hospital which direction do you go on Fairview?

8. To go from the post office to coffee shop which direction do you go on Elm Street?

9. To get from gas station to the post office which direction do you go on Green Avenue?

10. To get from beauty salon to the post office which direction do you go on Broad Street?
