


# Basic Math Vocabulary

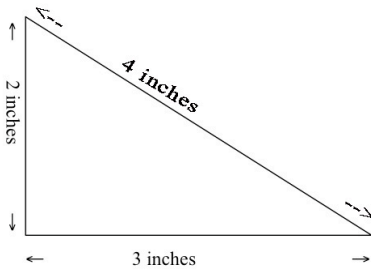
## Quiz 19

1. What is the area of this shape?



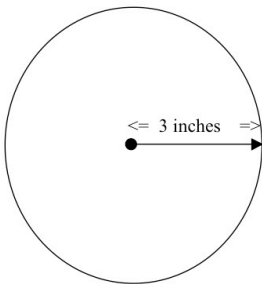
- a. 24 square inches
- b. 28 square inches
- c. 32 square inches

2. What is the area of this shape?



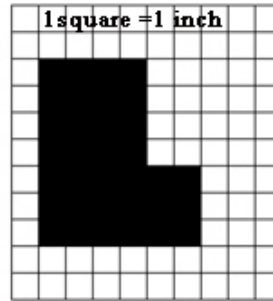
- a. 3 square inches
- b. 4 square inches
- c. 6 square inches

3. What is the area of this shape?



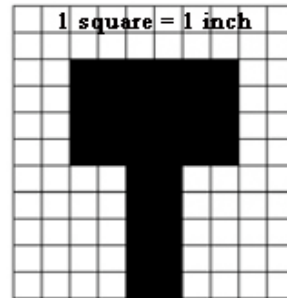
- a. a little over 18 square inches
- b. a little over 24 square inches
- c. a little over 28 square inches

4. What is the area of this shape?



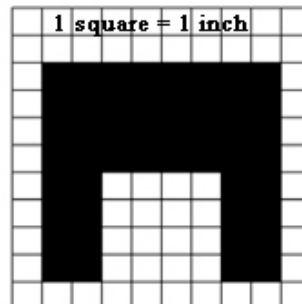
- a. 30 square inches
- b. 34 square inches
- c. 40 square inches

5. What is the area of this shape?



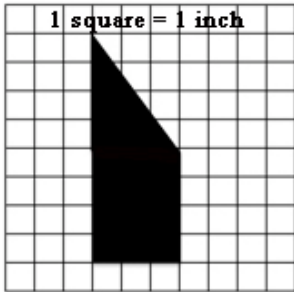
- a. 32 square inches
- b. 34 square inches
- c. 36 square inches

6. What is the area of this shape?



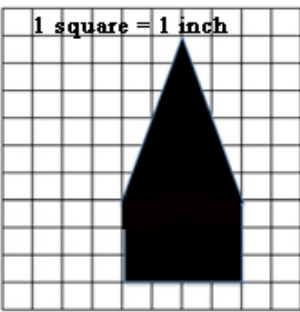
- a. 48 square inches
- b. 52 square inches
- c. 64 square inches

7. What is the area of this shape?



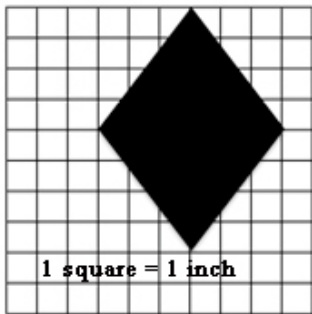
- a. 24 square inches
- b. 20 square inches
- c. 18 square inches

8. What is the area of this shape?



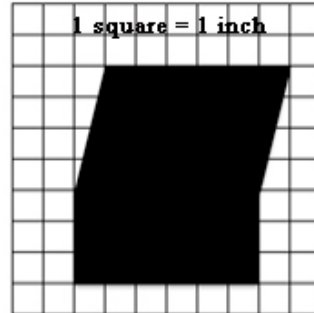
- a. 24 square inches
- b. 30 square inches
- c. 36 square inches

9. What is the area of this shape?



- a. 18 square inches
- b. 24 square inches
- c. 36 square inches

10. What is the area of this shape?



- a. 36 square inches
- b. 38 square inches
- c. 42 square inches

Answers

1. b
2. a
3. c
4. b
5. b
6. a
7. c
8. a
9. b
10. c