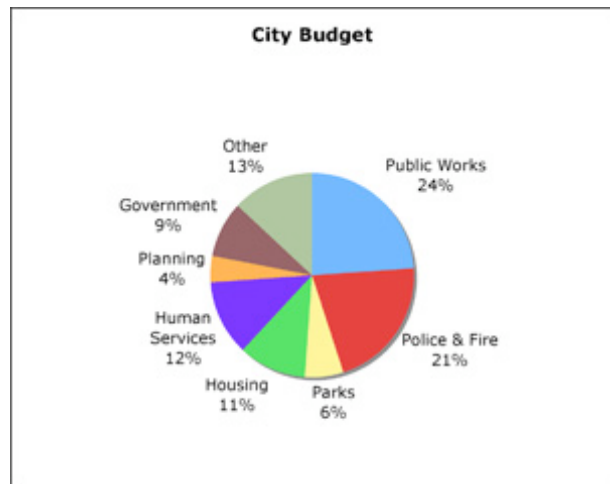
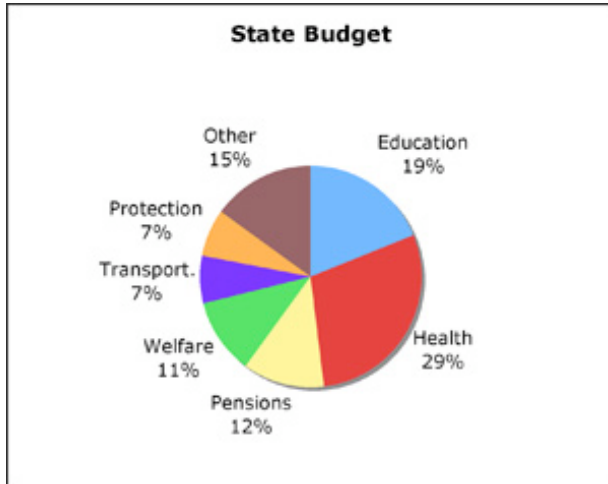


Basic Math Vocabulary

Quiz 9



1. What fraction of the budget did the state spend on pensions?

- a. about $\frac{1}{10}$
- b. about $\frac{1}{8}$
- c. about $\frac{1}{5}$

2. What fraction of the budget did the state spend on education?

- a. almost $\frac{1}{3}$
- b. almost $\frac{1}{4}$
- c. almost $\frac{1}{5}$

3. How did spending on pensions compare with spending on welfare?

- a. We spent about the same amount on welfare as on pensions.
- b. We spent about twice as much on welfare as on pensions.
- c. We spent about half as much on welfare as on pensions.

4. What fraction of the city budget was public works?

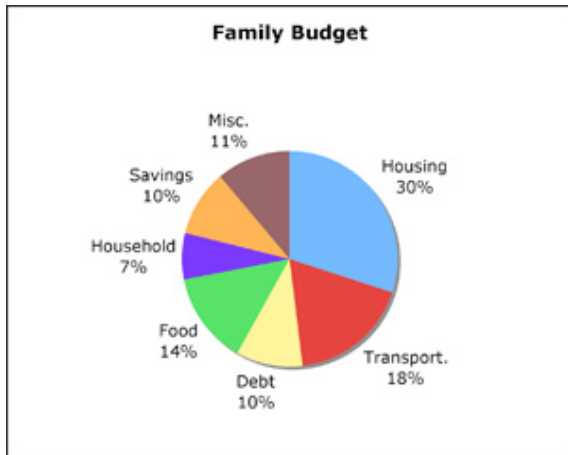
- a. about $\frac{1}{4}$
- b. about $\frac{1}{3}$
- c. about $\frac{1}{2}$

5. How much of the city budget goes to public works, police & fire, and parks combined?

- a. about $\frac{1}{4}$
- b. about $\frac{1}{3}$
- c. about $\frac{1}{2}$

6. How does spending on public works compare to spending on human services?

- a. It's about the same as on human services.
- b. It's twice as much as on human services.
- c. It's half as much as on human services.



7. What fraction of the family budget is housing and transportation?

- a. about half
- b. about a quarter
- c. about a third

8. How does spending on food compare to spending on housing?

- a. It's about as much as on housing.
- b. It's about twice a much as on housing.
- c. It's about half as much as on housing.

9. How does spending on housing compare to savings?

- a. It's double savings.
- b. It's triple savings.
- c. It's half of savings.

10. How does spending on food compare to spending on household items?

- a. It's triple spending on household items.
- b. It's double spending on household items.
- c. It's half spending on household items.

Answers

1. b
2. c
3. a
4. a
5. c
6. b
7. a
8. c
9. b
10. b